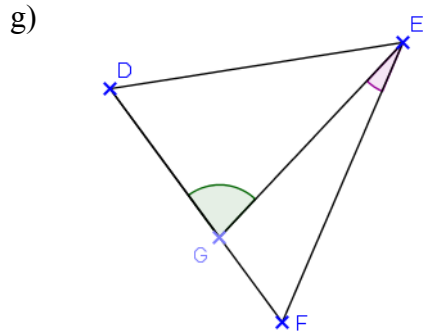
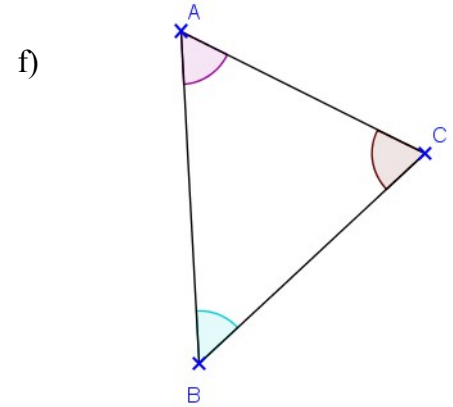
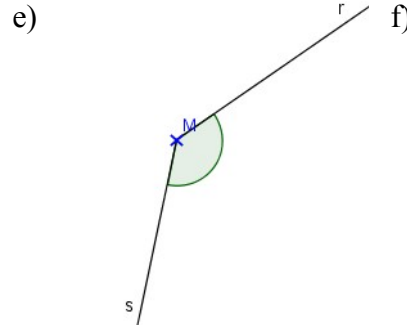
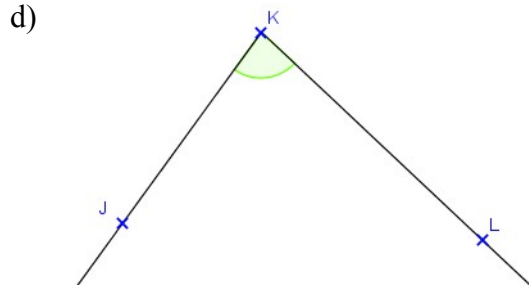
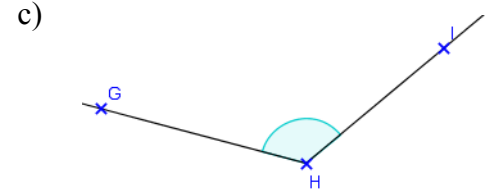
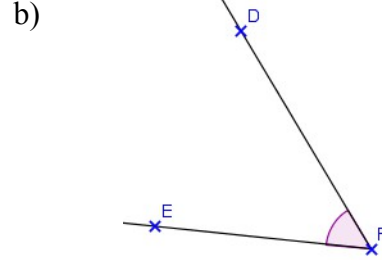
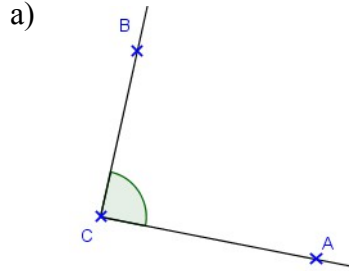


Exercice

Nommer les angles suivants de deux façons différentes:



**Correction :**a)  $\widehat{ABC}$  ou  $\widehat{CBA}$ b)  $\widehat{DFE}$  ou  $\widehat{EFD}$ c)  $\widehat{GHI}$  ou  $\widehat{IHG}$ d)  $\widehat{JKL}$  ou  $\widehat{LKJ}$ e)  $\widehat{rMs}$  ou  $\widehat{sMr}$ f)  $\widehat{ABC}$  ou  $\widehat{BCA}$  et  $\widehat{BAC}$  ou  $\widehat{CAB}$  et  $\widehat{ACB}$  ou  $\widehat{BCA}$ g)  $\widehat{DGE}$  ou  $\widehat{EGD}$  et  $\widehat{GEF}$  ou  $\widehat{FEG}$