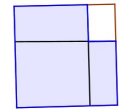
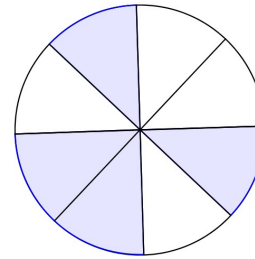
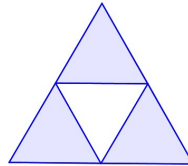
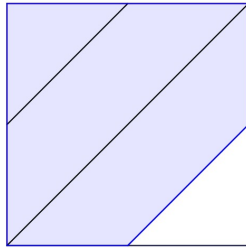
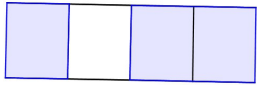
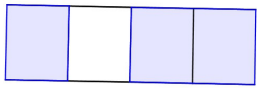


Exercice

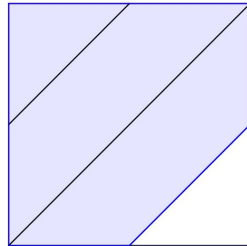
François a représenté les $\frac{3}{4}$ de la surface de chaque figure. Ses réponses sont-elles correctes? Justifier.



Correction :

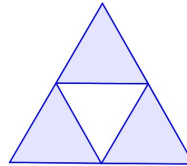


Correct

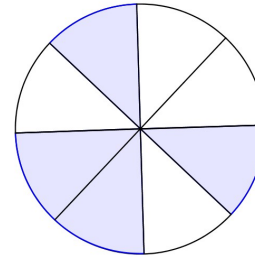


Pas correct

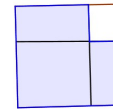
Les 4 parties
ne sont pas
superposables



Correct



Correct



Pas correct

Les 4 parties
ne sont pas
superposables